

**CS474/674 Image Processing and Interpretation
Sample Midterm Exam - Solutions**

Name: _____

1. [25 points] True/False Questions – To get credit, you must give brief reasons for each answer!

T F The filter shown below is a smoothing filter.

1 2 1
2 1 2
1 2 1

No negative weights.

T F Assuming an NxN image, the complexity of 2D FFT is $O(N^2 \log N)$.

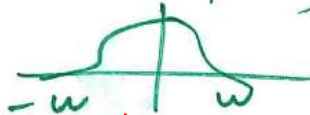
1D FFT: $N \log(N)$
N rows: $N^2 \log(N)$
N columns: $N^2 \log(N)$ } overall $N^2 \log(N)$

T F The magnitude of the FT carries more information than its phase.

The reconstruction using phase preserves more information.

T F The Nyquist theorem holds true for band-limited functions only.

The max frequency ω is finite



T F Unsharp masking is a special case of high boost filtering.

~~if $k=1$ then unsharp masking~~
 $g(x,y) = f(x,y) + (f(x,y) - f_{low}(x,y))$
 unsharp masking

Correct, when $k=1$

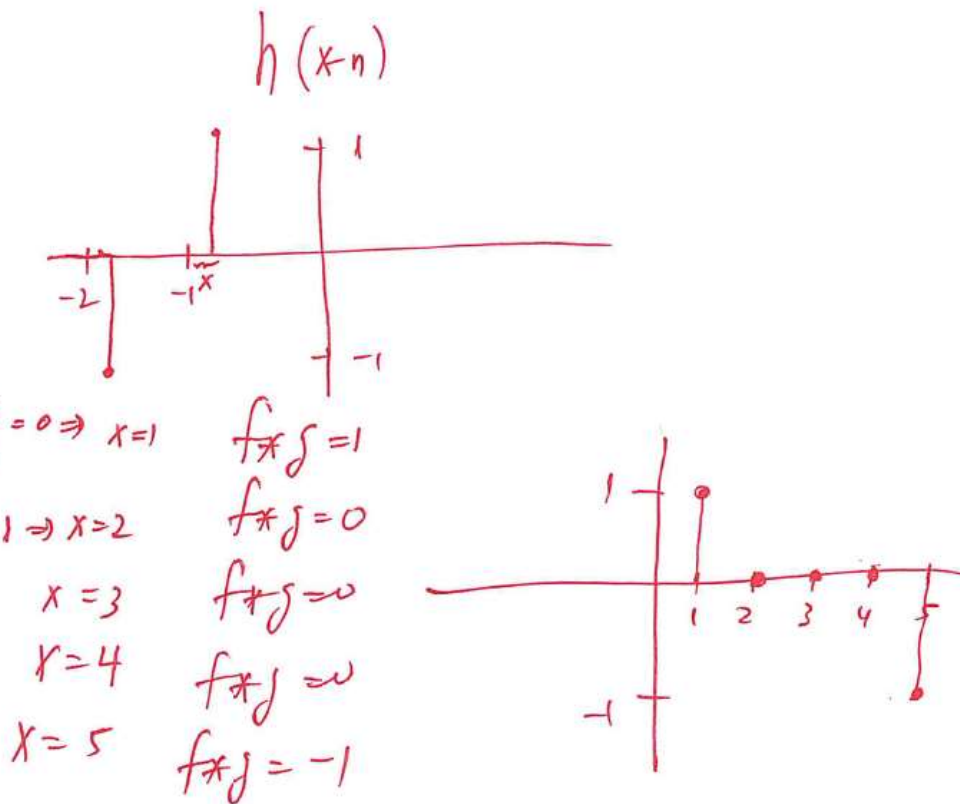
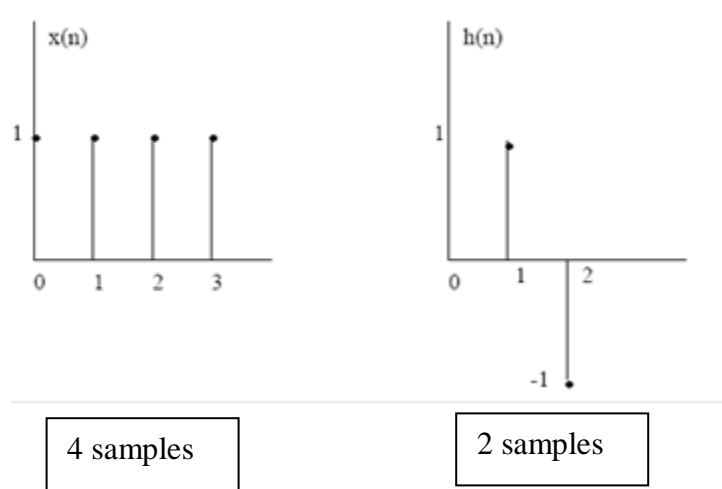
$$g(x,y) = f(x,y) + kg_{mask}(x,y), \quad k \geq 0$$

2. [15 points] State and prove the convolution theorem in the continuous case. For simplicity, assume 1-D functions.

lecture

See notes

3. [15 points] Find and plot the discrete convolution of the following discrete sequences:



4. [20 points]. A 3 bits/pixel image of size 5x5 is given below. Find the following: (a) the output of a 3x3 averaging filter at (1,1), (b) the output of a 3x3 median filter at (1,1) and (c) the gradient magnitude at (1,1) using the Sobel masks shown below.

		IMAGE				
y \ x=		0	1	2	3	4
0		3	7	6	2	0
1		2	4	6	1	1
2		4	7	2	5	4
3		3	0	6	2	1
4		5	7	5	1	2

-1	-2	-1
0	0	0
1	2	1

-1	0	1
-2	0	2
-1	0	1

$$a) \frac{3+7+6+2+4+6+4+7+2}{9} = 41/9 \approx 4.55 = 5$$

$$b) 2 \ 2 \ 3 \ 4 \ (4) \ 6 \ 6 \ 7 \ 7 \rightarrow 4$$

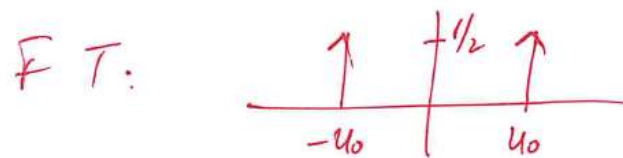
$$c) G_y = (-3 - 14 - 6) + (4 + 14 + 2) = -3$$

$$G_x = (-3 - 4 - 4) + (6 + 12 + 2) = 9$$

$$\text{Magnitude} = \sqrt{G_x^2 + G_y^2} = \sqrt{9^2 + (-3)^2} = \sqrt{90} \approx 9.48 \approx 9$$

4. [15 points] What is the FT of $\cos(4\pi x) + \cos(10\pi x)$? How many samples should we obtain according to the Nyquist theorem in order to avoid aliasing?

We know that $\cos(2\pi u_0 x)$ has the following



$$\cos(4\pi x) = \cos(2 \cdot 2 \cdot \pi x)$$

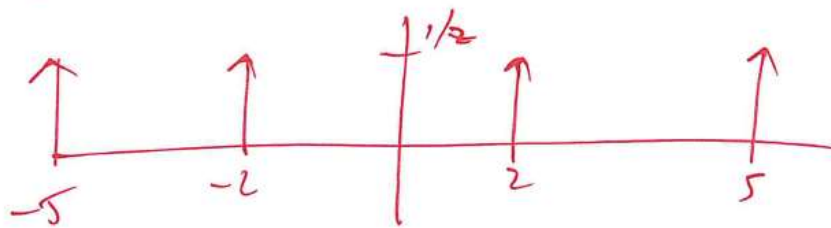
A horizontal axis with a vertical line at the center labeled $f/2$. Two upward-pointing arrows are located at -2 and 2 on the axis.

$$\cos(10\pi x) = \cos(2\pi \cdot 5 x)$$

A horizontal axis with a vertical line at the center labeled $f/2$. Two upward-pointing arrows are located at -5 and 5 on the axis.

$$\mathcal{F}(\cos(4\pi x) + \cos(10\pi x)) =$$

$$\mathcal{F}(\cos(4\pi x)) + \mathcal{F}(\cos(10\pi x))$$



max freq $w = 5$ so $\Delta x \leq \frac{1}{2w} = \frac{1}{10}$

at least 10 samples

5. [10 points] Given the 3x3 image shown below, compute the histogram equalized image (assume that the gray-levels are in the range [0..7]). Show all the steps.

3 1 1
1 7 6
0 2 1

r	0	1	2	3	4	5	6	7
n_r	1	4	1	1	0	0	1	1
	0.1111	0.4444	0.1111	0.1111	0	0	0.1111	0.1111
	$1/9$	$4/9$	$1/9$	$1/9$	0	0	$1/9$	$1/9$

$$S_k = T(r_k) = \sum_{j=0}^k P_r(r_j) \quad L=8$$

$$S_0 = \frac{1}{9} \times (L-1) = \frac{7}{9} \approx 1$$

$$S_1 = \left(\frac{1}{9} + \frac{4}{9}\right) \times 7 \approx \frac{35}{9} \approx 4$$

$$S_2 = \left(\frac{1}{9} + \frac{4}{9} + \frac{1}{9}\right) \times 7 = \frac{42}{9} = 5$$

$$S_3 = \left(\frac{1}{9} + \frac{4}{9} + \frac{1}{9} + \frac{1}{9}\right) \times 7 = \frac{49}{9} \approx 5$$

$$S_4 = S_5 = 5$$

$$S_6 = \frac{56}{9} \approx 6$$

$$S_7 = 7$$

r	0	1	2	3	4	5	6	7
s	1	4	5	5	5	5	6	7

Equalized image:

5 4 4
4 7 6
1 5 4

7. Graduate Students Only [10 points] The pixel intensity values of a gray level image have the probability density function $p_r(r)$ given by $p_r(r) = 2(1-r)$, for $0 \leq r \leq 1$, and zero otherwise. It is desired to transform the gray levels of the image so that they have the probability density function $p_z(z) = 2z$, for $0 \leq z \leq 1$, and zero otherwise. Assume that r and z are continuous random variables. Find the transformation that accomplishes that.

$$P_r(r) = \begin{cases} 2(1-r) & 0 \leq r \leq 1 \\ 0 & \text{otherwise} \end{cases} \quad P_z(z) = \begin{cases} 2z & 0 \leq z \leq 1 \\ 0 & \text{otherwise} \end{cases}$$

$$\begin{aligned} S = T(r) &= \int_0^r 2(1-w) dw = 2 \left[\int_0^r dw - \int_0^r w dw \right] = \\ &= 2 \left[w \Big|_0^r - \frac{1}{2} w^2 \Big|_0^r \right] = 2 \left(r - \frac{1}{2} r^2 \right) = \\ &= 2r - r^2 = r(2-r) \end{aligned}$$

$$\begin{aligned} V = G(z) &= \int_0^z 2w dw = 2 \int_0^z w dw = 2 \frac{1}{2} w^2 \Big|_0^z \\ &= z^2 \quad \underline{z = \sqrt{V} = G^{-1}(V)} \end{aligned}$$

$$Q(r) = G^{-1}(T(r)) = \sqrt{r(2-r)}$$